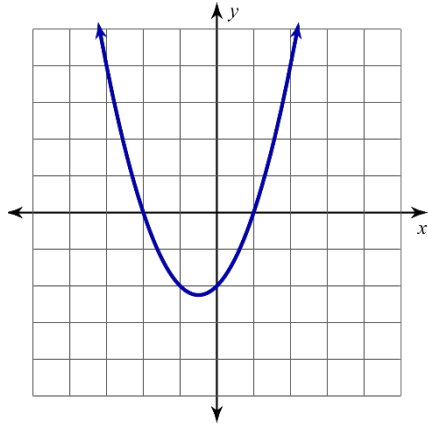


PAREJAS PERFECTAS

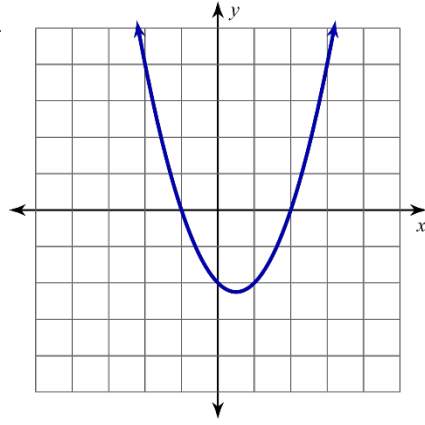
Emparejamiento

1)



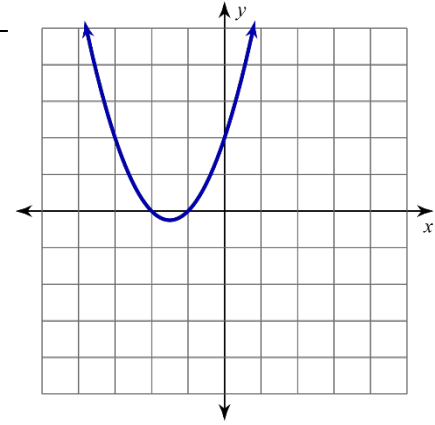
(A) $g(x) = (x+1)(x+2)$

2)



(B) $y = (x-1)(x+2)$

3)



(C) $f(x) = (x+1)(x-2)$

Haciendo Predicciones

¿Qué crees que es la ecuación del siguiente polinomio?

