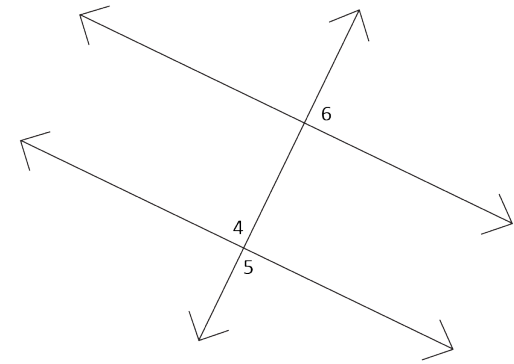
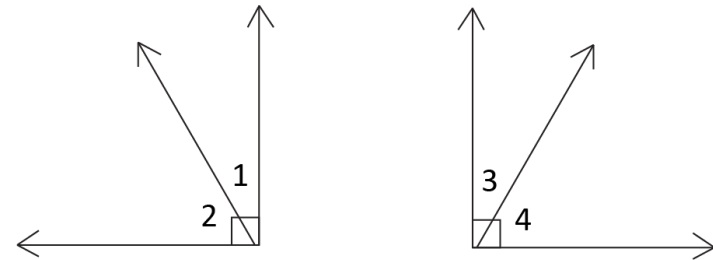


TARJETAS DE TAREAS PARA EL ALEGATO FINAL

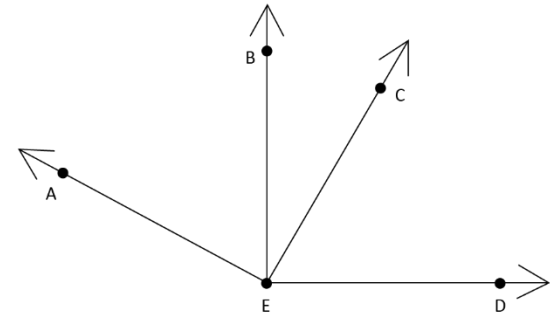
Dado: $\angle 4 \cong \angle 6$
Demuestra: $\angle 5 \cong \angle 6$



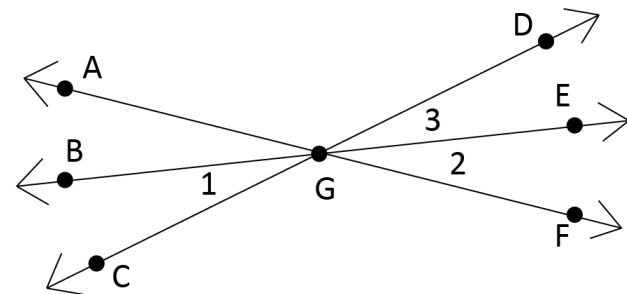
Dado: $\angle 1 \cong \angle 3$
Demuestra: $\angle 2 \cong \angle 4$



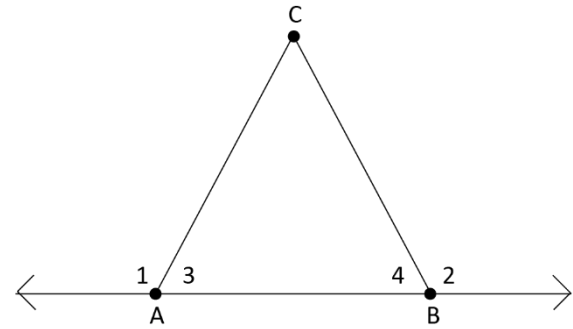
Dado: $\angle AEC$ es un ángulo recto
 $\angle BED$ es un ángulo recto
 Demuestra: $\angle AEB = \angle DEC$



Dado: \overrightarrow{GE} biseca $\angle DGF$
 AF interseca BE y CD
 Demuestra: $\angle 1 = \angle 2$



Dado: $\angle 3 = \angle 4$
Demuestra: $\angle 1 = \angle 2$



Dado: $\angle 1 \cong \angle 4$
Demuestra: $\angle 2 \cong \angle 3$

