





SOLVING EQUATIONS: GUIDED NOTES

Using Do/Undo Tables

1) Solve $4x + 5 = 25$ for x .



2) Use the following equations to find the final result for:  +  ·  = ?

$$\text{Laptop} + \text{Laptop} + \text{Laptop} = 24$$

$$\text{Phone} + \text{Laptop} + \text{Phone} = 18$$

$$(\text{Headphones} + \text{Headphones}) \cdot \text{Laptop} = 16$$

$$\text{Headphones} + \text{Headphones} + \text{Phone} = 9$$