



PROBLEMAS DE EJEMPLO

Resuelve cada una de las siguientes ecuaciones para la variable dada.


1) $m + 12 = 10$




2) $-2 = g - 9$




3) $\frac{a}{9} = -4$




4) $\frac{2}{3}h = 10$




5) $-\frac{1}{2}n = -9$



6) $11 = \frac{x}{-5} + 8$



7) $6c + 8 = 50$



8) $7 - 3x = 34$

