



## SAMPLE PROBLEMS

Solve each of the following equations for the given variable.


1)  $m + 12 = 10$




2)  $-2 = g - 9$




3)  $\frac{a}{9} = -4$




4)  $\frac{2}{3}h = 10$




5)  $-\frac{1}{2}n = -9$



6)  $11 = \frac{x}{-5} + 8$



7)  $6c + 8 = 50$



8)  $7 - 3x = 34$

