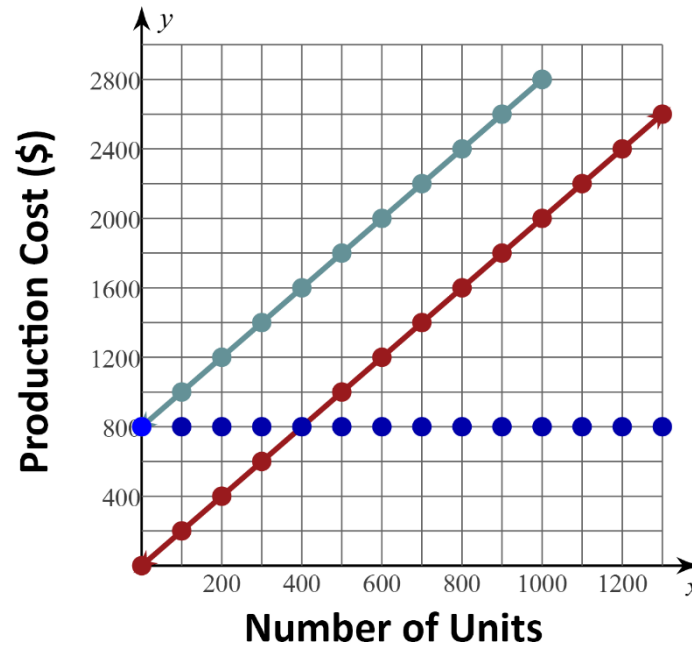


STATION 1



Fixed Cost	Variable Cost	Total Cost
●	—	—

Question: What is the fixed cost to produce 1200 units?

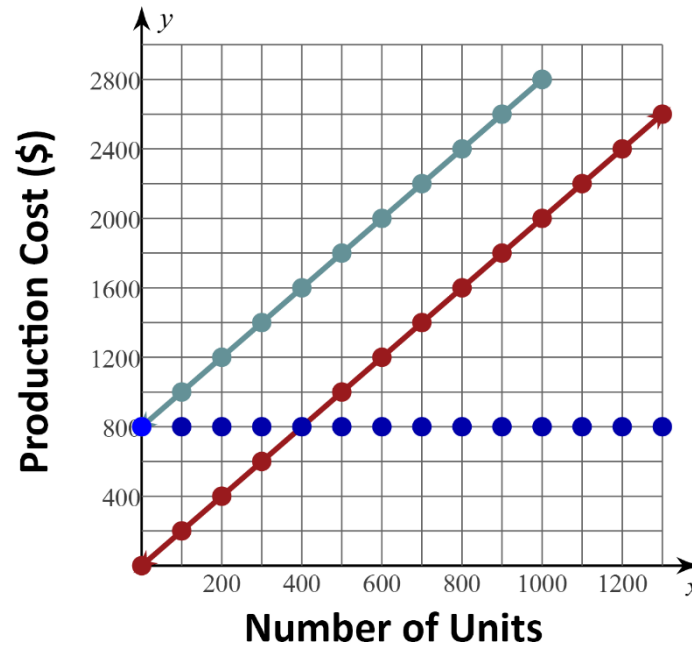
If the answer is **800**, go to **Station 3**.

If the answer is **2400**, go to **Station 2**.

If the answer is **3200**, go to **Station 5**.

If the answer is **1600**, go to **Station 4**.

STATION 2



Fixed Cost	Variable Cost	Total Cost
●	—	—

Question: What is the fixed cost to produce 500 units?

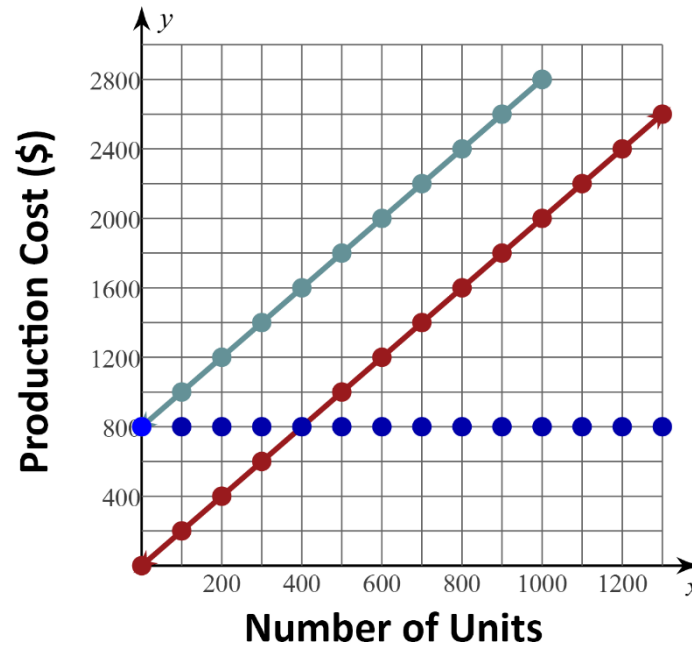
If the answer is **1000**, go to **Station 3**.

If the answer is **800**, go to **Station 5**.

If the answer is **1800**, go to **Station 1**.

If the answer is **200**, go to **Station 6**.

STATION 3



Fixed Cost	Variable Cost	Total Cost
●	—	—

Question: What is the variable cost to produce 900 units?

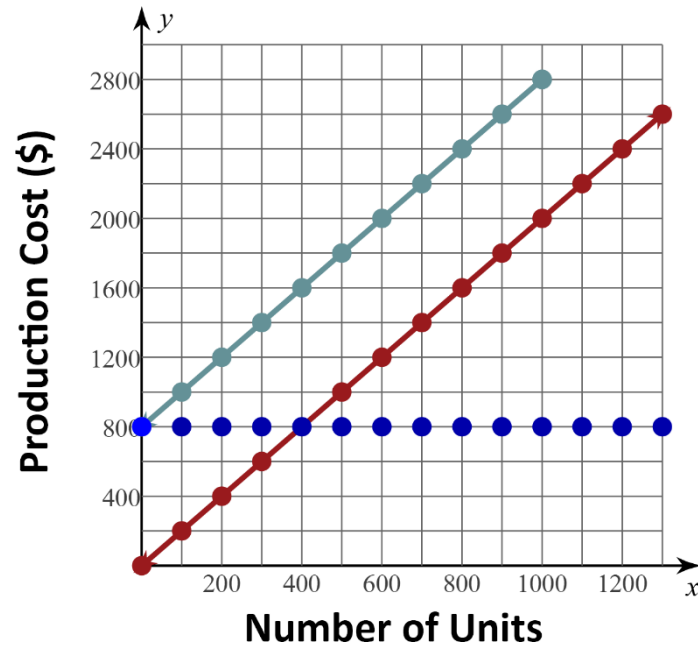
If the answer is **800**, go to **Station 6**.

If the answer is **1000**, go to **Station 4**.

If the answer is **2600**, go to **Station 1**.

If the answer is **1800**, go to **Station 2**.

STATION 4



Fixed Cost	Variable Cost	Total Cost
●	—	—

Question: What is the total cost to produce 900 units?

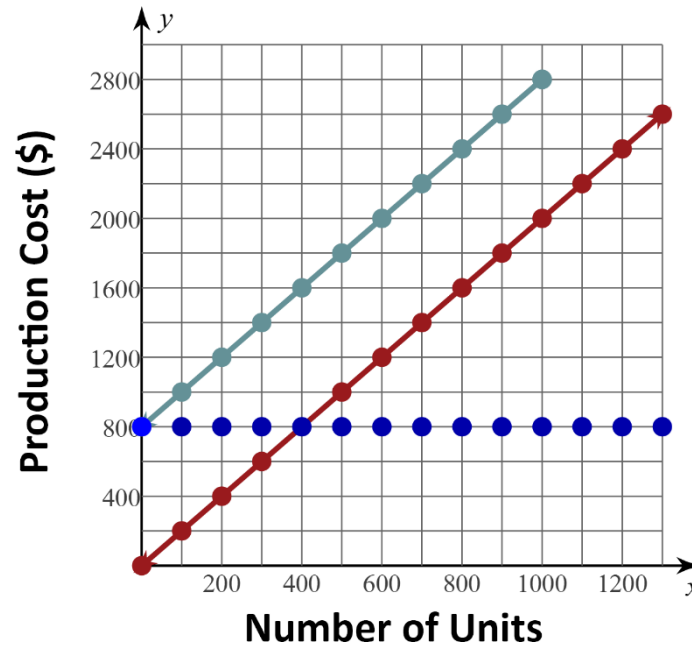
If the answer is **1800**, go to **Station 1**.

If the answer is **800**, go to **Station 3**.

If the answer is **2600**, go to **Station 6**.

If the answer is **1000**, go to **Station 5**.

STATION 5



Fixed Cost	Variable Cost	Total Cost
●	—	—

Question: How much more is the variable cost to produce 800 units than the variable cost to produce 200 units?

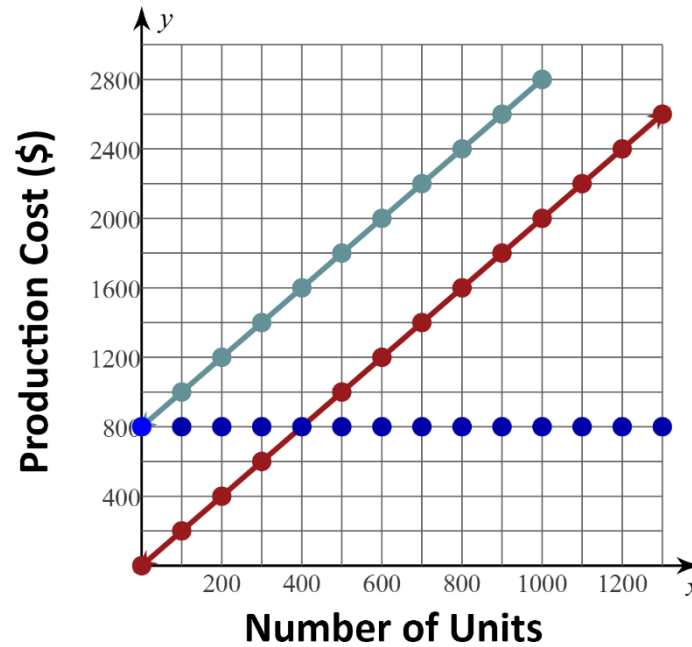
If the answer is **1200**, go to **Station 4**.

If the answer is **1600**, go to **Station 1**.

If the answer is **400**, go to **Station 2**.

If the answer is **2000**, go to **Station 6**.

STATION 6



Fixed Cost	Variable Cost	Total Cost
●	—	—

Question: What is the total cost to produce 1300 units? Use the graph of fixed costs and variable costs.

If the answer is **800**, go to **Station 2**.

If the answer is **1800**, go to **Station 3**.

If the answer is **3400**, go to **Station 1**.

If the answer is **2600**, go to **Station 5**.